

Wednesday Numeracy-using a pictogram to answer and write own questions.

Class 2's favourite T shirt colours.








Key



= 1 T-shirt

1. What colour is the most popular in class 2?
2. What colour is the least popular?
3. How many people prefer a blue T shirt compared to a red T shirt?
4. How many children are in class 2?
5. How many children liked either purple or red T shirts?

## Minibeast collecting

Minibeast	
Woodhouse	
Ladybird	
Centipede	
Worm	
Spider	

### Key

● = 1 minibeast

Using this pictogram about Minibeasts, write down 4 questions of your own about the pictogram? After, see if you can answer them or even ask someone else to!

[illegible]

