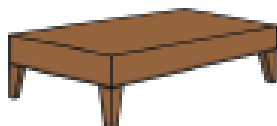


Name: _____ Date: _____

Science Assessment Year 1: Everyday Materials

total marks

1. Draw a line to match each object with the material they are made from.



plastic

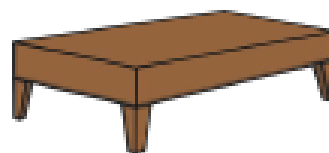
fabric

metal

wood

2

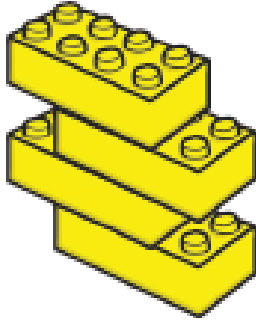
2. Circle three objects that are made from metal.



2

Total for this page

3. What material are these made of?



4. Look at these five materials.

wood

metal

plastic

fabric

glass

Choose which material you would use for the following objects.



jumper




ring



ball



door



window

--	--	--	--	--

5. Place these materials correctly in the venn diagram.



plastic



glass



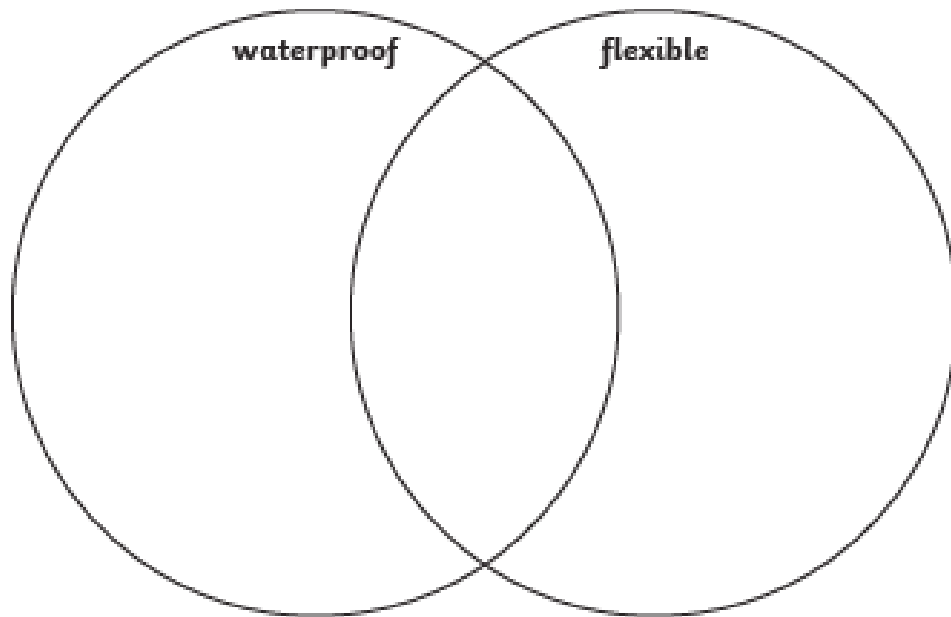
fabric



ceramic




metal



6. Look at the venn diagram above. Which material do you think would be best to make a winter hat?

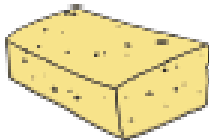
Explain your choice

7. Match the different materials with their properties.



fabric

absorbent



sponge

flexible



rock

hard



rubber band

soft

8. Complete the following table.

	true	false
plastic is waterproof		
glass is not flexible		
metal is hard		
metal is transparent		

2

2

Total for

9. Explain the meaning of the following properties.

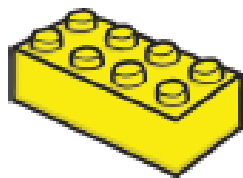

transparent _____

smooth _____

opaque _____

3

10. Join each object to one made from the same material.



4

Total for this page