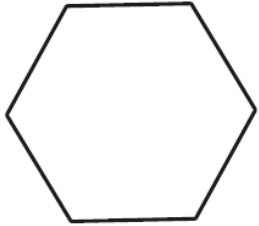
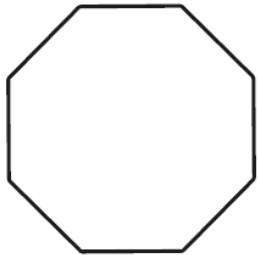


Can you write the name of each shape then
how many sides and corners it has?

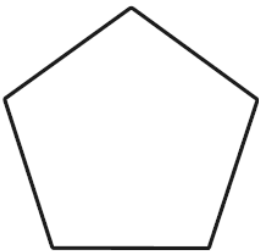
Wednesday's Numeracy – 2D shape properties




What are the properties of a _____?



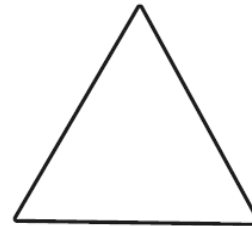
What are the properties of an _____?



What are the properties of a _____?



What are the properties of a _____?



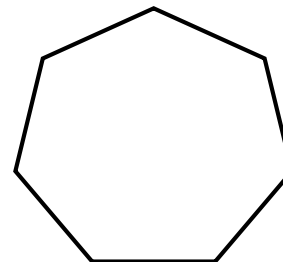
What are the properties of a _____?



What are the properties of a _____?



What are the properties of a _____?



What are the properties of a _____?
