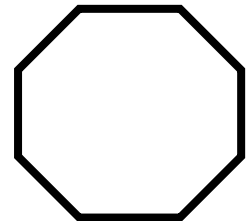
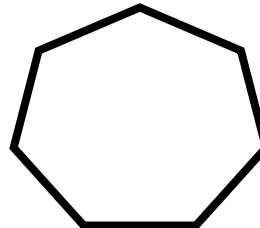
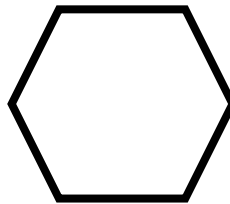
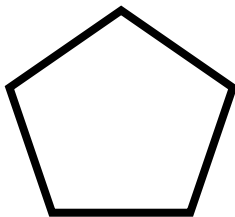
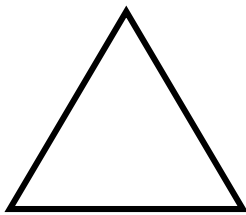
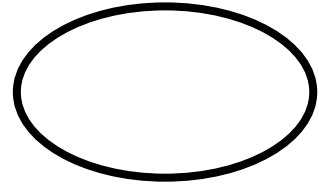




Tuesday's Numeracy – Naming 2D shapes

Can you write on each shape how many sides it has and then write the 2D shape name underneath?



Look at the shapes on the next page. Fill in the tally below to show how many of each shape you managed to spot.

You might like to put a tick on each shape as you find in to help you keep count!

Shape	Tally	Total
Circle	I	
Oval		
Triangle		
Square		
Rectangle		
Pentagon		
Hexagon		
Heptagon		
Octagon		

2D Shape Spot

